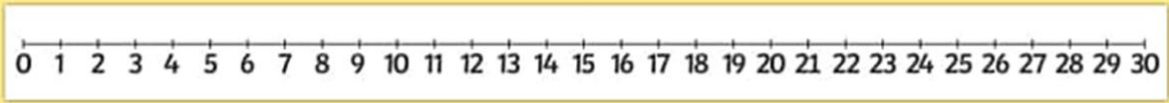
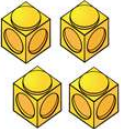
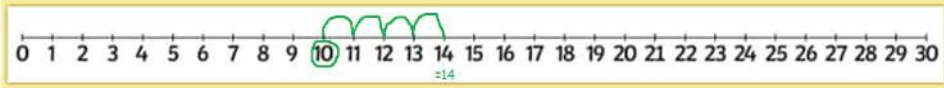
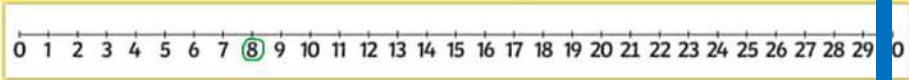




### Year One Maths Planning 18th January 2021

### Weekly Focus: Addition to 30/ Counting On


	Activity
Monday	<p>This week we are going to be thinking all about <b>Addition: Counting On</b>. Watch <b>18.1.21 maths video</b> on your <b>Teams</b> account and join in with the following tasks.</p> <p><b>Task 1:</b> Count forwards and backwards to 30 with Miss Jewitt.</p>  <p><b>Task 2:</b> How many? Count to find how many magic beans Jack has got. <b>Task 3:</b> Adding the golden eggs to find out how many. Use a number line to help.</p>
Tuesday	<p><b>Task 1:</b> Counting on: Use the number line to count on and answer the 3 questions on page 2 of this document. So – start at 10 (see numberline below) and count on 4 by jumping to the next number 4 times. Can you see that 10 + 4 more = 14. <b>10 + 4 = 14</b></p> <p>e.g) <math>10 +</math>  <b>What number is this?</b></p>  <p>(You do not need to print the page you can write in your maths books: a) <math>10 + 6 = \underline{\quad}</math>).</p> <p><b>Task 2:</b> Use the number line to count on to find these answers: <b>17 + 2 =</b>      <b>20 + 3 =</b>      <b>3 + 7 =</b>      <b>21 + 5 =</b>    Enjoy!</p>
Wednesday	<p><b>Task 1:</b> Look at the first question on page 4 of this document. Draw the 8 ants in your book, then count on 4 more. Use your number line to check that you were correct. Start at 8 and count on 4 more.</p>  <p><b>Task 2:</b> Answer the following two ants questions: use your number line to help.</p>
Thursday	<p><b>Task 1:</b> Play this fun Robot Addition game. <a href="https://www.topmarks.co.uk/addition/robot-addition">https://www.topmarks.co.uk/addition/robot-addition</a> Use the number line on screen to help you to find the answers. Enjoy Year One!</p> <p><b>Task 2:</b> In your books write these counting on questions: <b>13 + 5 =</b>    <b>11 + 4 =</b>    <b>16 + 2 =</b>    (you can do some extra ones if you like!)</p>
Friday	<p><b>Task 1:</b> Answer the word problems on page 5 in your maths books. Use your number line to help.</p> <p><b>Task 2:</b> Play Robot Addition game again. <a href="https://www.topmarks.co.uk/addition/robot-addition">https://www.topmarks.co.uk/addition/robot-addition</a> Enjoy Year One!</p>

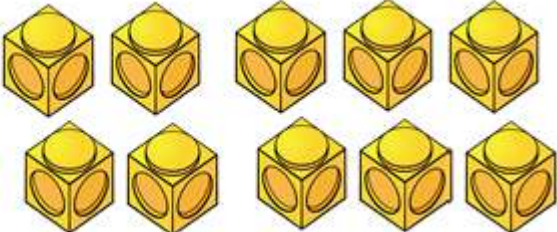
Don't forget to log on to Numbots every day! Who can collect the most coins?  
Good luck everyone!



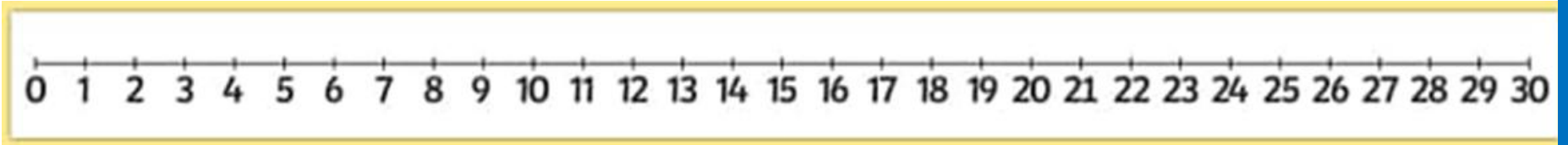
Tuesday: Counting on: Use your number line to help. (or the one one page 3)

a)  $10 +$   What number is this?

b)  $8 +$   What number is this?

c)  $8 +$   What number is this?

Tuesday: Number line




Wednesday: Counting on

a) There were 8 ants out for a walk.

Then 4 more joined in.

How many ants were out for a walk?



b) There were 9 ants out for a walk.

Then 5 more joined in.

How many ants were out for a walk?

c) There were 11 ants out for a walk.

Then 8 more joined in.

How many ants were out for a walk?

Friday: Counting on: Word Problems



a) Eva found 12 eggs.  
Her mum bought 6 more.

How many eggs do they have now?

b) The shop had 8 juice boxes.

They ordered 5 more.



How many juice boxes do they have now?