

## Find the total

- 1 Annie wants to buy some new toys.



- a) How much does it cost to buy the teddy and the yoyo?


- b) How much does it cost to buy the toy train and the football?

- c) How much does it cost to buy one of everything?

- d) Annie has £9  
Circle three items she could buy.  
Compare answers with a partner.



- 2 Whitney goes to the cinema and buys these sweets.



How much money does Whitney spend altogether?

- 3 Complete the statements.

a)  $£3 + 42p = £$   and  p



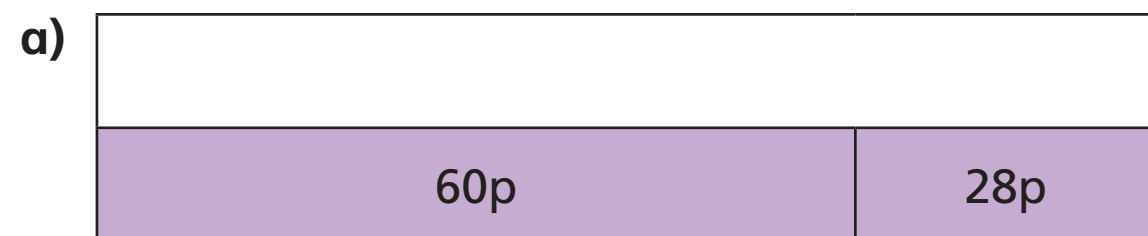
b)  $£7 +$   p = £7 and 96p

c)  $£$   + 3p = £11 and  p

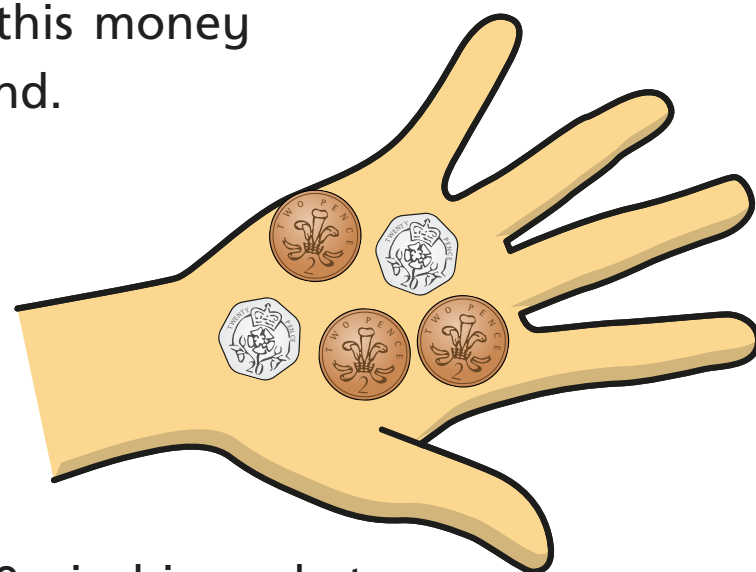
d)  $£$   and 53p = 50p + 3p + £18

e)  $£10 +$   p + 50p = £10 and 70p

4 Complete the bar models.



5 Ron has this money in his hand.



He has 29p in his pocket.

How much money does Ron have altogether?

6 Dexter, Tommy, Alex and Rosie are going shopping.



a) Dexter buys a comic book and a chocolate bar.

How much does Dexter spend?

b) Tommy buys a bottle of water, a lollipop and an apple.

How much does Tommy spend?

c) Alex buys 2 lollipops and a box of crayons.

How much does Alex spend?

£  and  p

d) Rosie spends £3 and 80p

What items could Rosie have bought?

\_\_\_\_\_

Compare answers with a partner.

