


Wednesday Maths

L.O: To use arrays

1 How many pears are there?



$$\square + \square + \square = \square$$

$$\square \times \square = \square$$

There are pears.

2 How many stars are there?




$$\square + \square = \square$$

$$\square \times \square = \square$$


There are stars.

- 3 Write two additions and two multiplications for the array.



What do you notice?

- 4 Write two multiplications for this array.



- 5 Draw an array to show 7×3

Complete the number sentence.



$$7 \times 3 = \square$$

Is there more than one way to draw the array?

- 6 Draw three different arrays to show 12

- 7 Draw dots to show each multiplication in two ways.

The first one has been done for you.

| Multiplication | Array 1 | Array 2 |
|----------------|---|---|
| 3×8 |  |  |
| 2×5 | | |
| 4×9 | | |
| 6×1 | | |

- 8 Can you see the multiplications 5×4 and 4×5 in the array?

