


Wednesday Maths

L.O: To divide by 10.

1 Here are some crayons.



A pack holds 10 crayons.

How many packs can be made?

Complete the sentences.


There are crayons.

There are crayons in a pack.

$60 \div 10 =$

packs can be made.

- 2 Share 40 counters equally between 10 groups.




Complete the division.

$$40 \div \square = \square$$

You can use this box to work out your answer.

- 3 Complete a fact family for the array.



4 Write the missing numbers.

a) $70 \div 10 = \square$

d) $\square \text{ tens} \div 10 = 2$

b) $80 \div 10 = \square$

e) $\square \div 10 = 6$

c) $1 \text{ ten} \div 10 = \square$

5 Rosie has these number cards.

4

10

40

Complete the number sentences using only these numbers.

$$\square \div \square = \square$$

$$\square \times \square = \square$$

Are there any other ways to complete the sentences?

- 6 Tommy has 100 stickers for his sticker book.
He can fit 10 stickers on each page.
How many pages can Tommy fill?

You can use this box to work out your answer.

