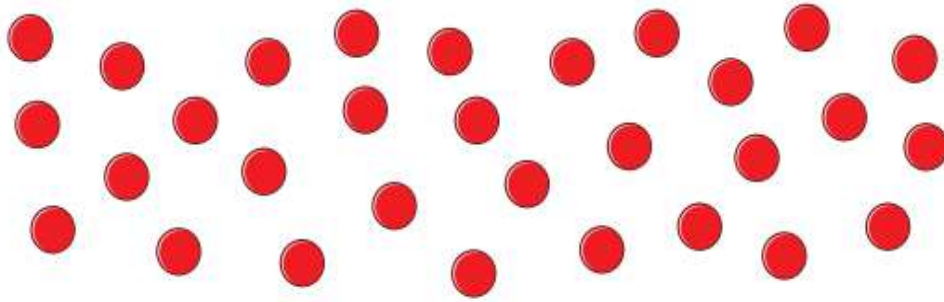


## Tuesday Maths

L.O: To divide by 5.

1 Here are some counters.



a) Draw circles around groups of 5

b) Complete the sentences.

There are 30 counters.

There are  counters in each group.

There are  groups.

$30 \div 5 =$

$\times 5 = 30$

2 Share the sweets between the party bags.



There are  sweets.


There are  party bags.

There are  sweets in each bag.

$$15 \div \boxed{\phantom{00}} = \boxed{\phantom{00}}$$

3 Complete the number sentences for each array.


a)



$$\boxed{\phantom{00}} \times 5 = 20$$

$$20 \div 5 = \boxed{\phantom{00}}$$

b)



$$\boxed{\phantom{00}} \times 5 = \boxed{\phantom{00}}$$

$$\boxed{\phantom{00}} \div 5 = \boxed{\phantom{00}}$$

4 Draw an array to show that  $10 \div 5 = 2$

Use this box to draw your answer.

5 A boat can fit 5 people.

Work out how many boats are needed for 45 people.

Use this box to work out your answer.

6 Complete the divisions.

a)  $15 \div 5 =$

b)  $25 \div 5 =$

c)  $50 \div 5 =$

d)  $60 \div 5 =$

e)   $\div 5 = 7$

f)   $\div 5 = 11$

g)   $\div 5 = 8$

h)   $\div 5 = 0$

7 Annie buys 5 lollipops.



This costs her 50p.

How much do 2 lollipops cost?

Use this box to work out your answer.