


Thursday Maths

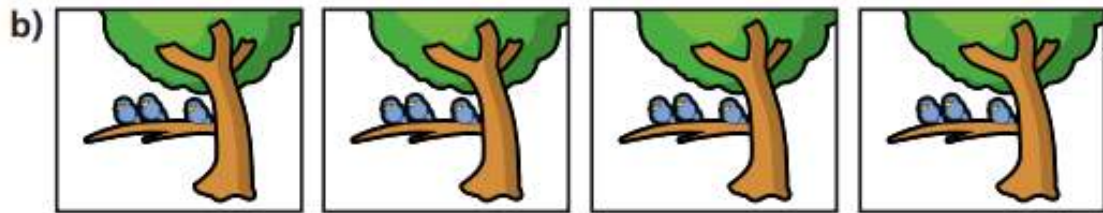
L.O: To multiply by 3.

- i** Complete the sentences.

Write an addition sentence and a multiplication sentence for each picture.



There are equal groups of




There are equal groups of




There are equal groups of

2 Write two multiplication sentences for each part of the question.

a)

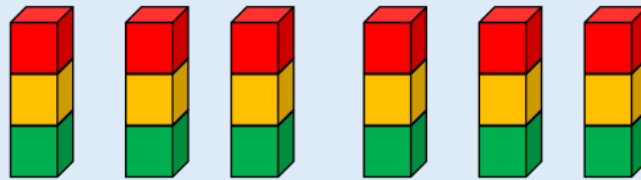


b)



3

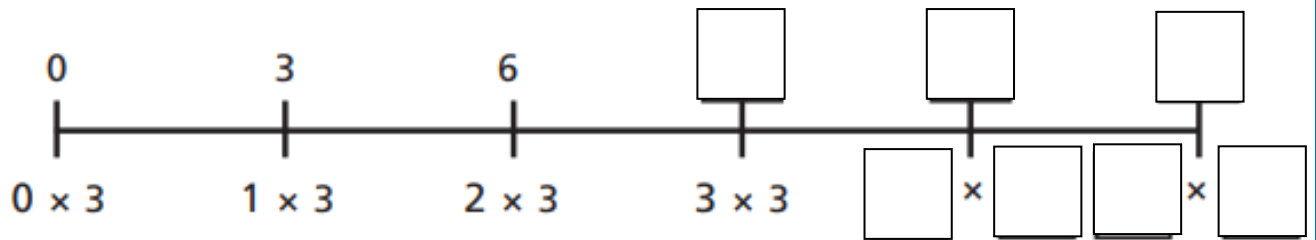
Use the image to write a repeated addition and a multiplication sentence:




$$\underline{\quad} + \underline{\quad} + \underline{\quad} + \underline{\quad} + \underline{\quad} + \underline{\quad} = \underline{\quad}$$

$$\underline{\quad} \times \underline{\quad} = \underline{\quad}$$

4 Complete the number line.



5




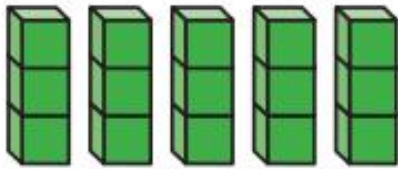
6 lots of 3
is 6 more than
5 lots of 3

Do you agree with Dora?

Explain your answer in the box.

6 Which is the odd one out?

Tick your answer.



Explain your answer.

Is there more than one answer?

Explain your answer in the box.