
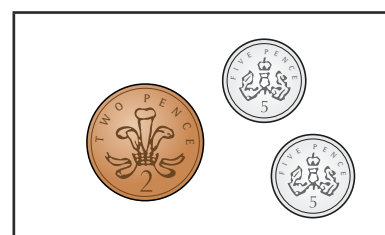


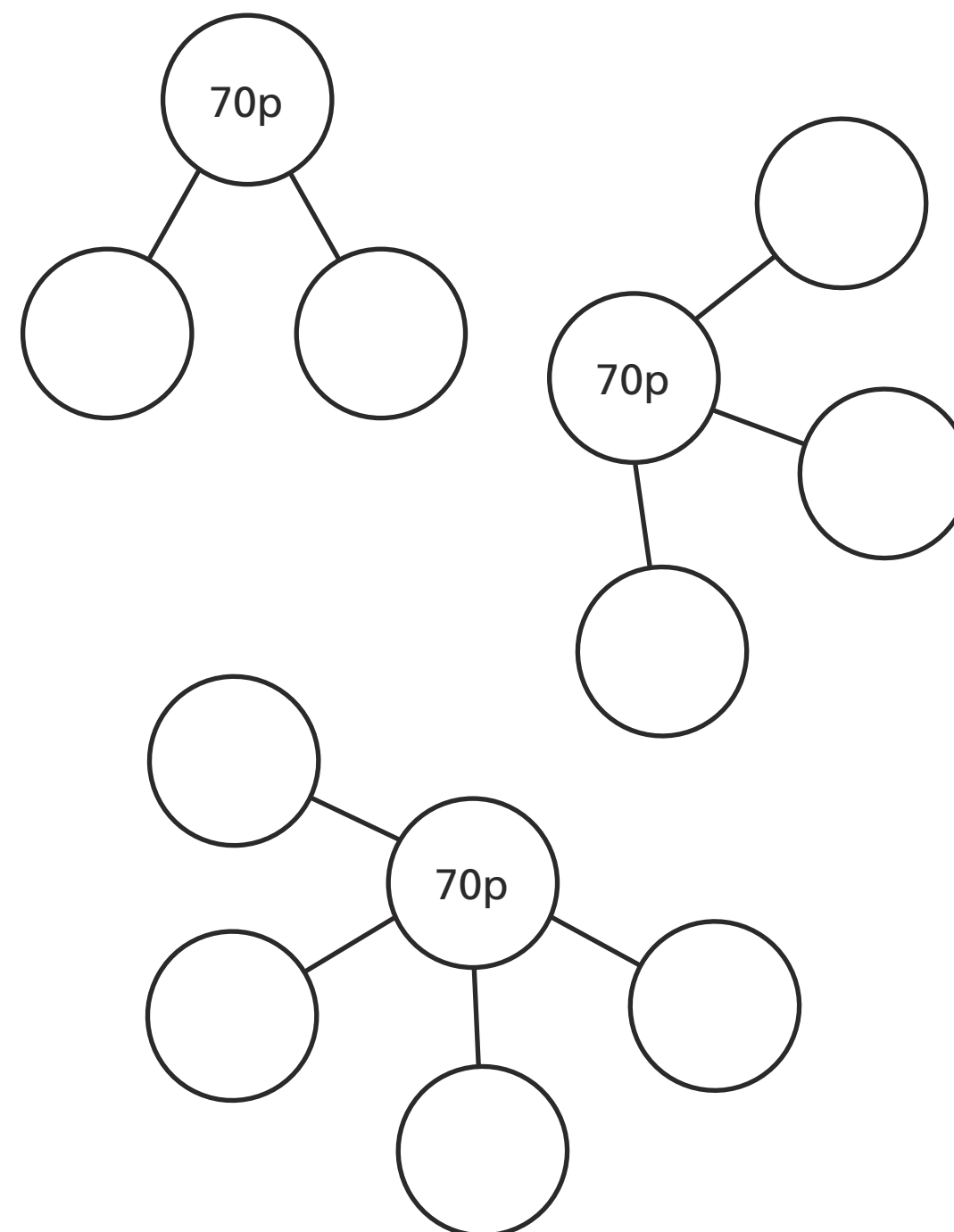


Make the same amount

1 Match the amounts.



- 2 Rosie is making 70p in different ways.
a) Complete the part-whole models to show the coins Rosie can use.




- b) Can you make 70p in any other ways?
Talk about it with a partner.



3

I have £30
in notes.



a) What notes could Ron have?

b) What is the fewest number of
notes Ron could have?

Which notes are they?

c) What is the greatest number of
notes Ron could have?

Which notes are they?

4


Represent £4 and 51p in two different ways.



5

Dexter, Dora and Rosie each have some money.


a)



I have two 20p coins
and four 10p coins.

How much money does Dexter have?

b)




I have the same
amount of money as Dexter,
but only three coins.

Draw Dora's coins.

c)

I have the same
coins as Dora and I have
two notes.



How much money could Rosie have?

£ and p

Compare answers with a partner.

