

# Number Bonds—Problem Solving

Can you write the number sentences for these number stories :



There are 5 shells on the beach.  
3 are pink and 2 are blue.

$$\square + \square = \square$$



I have 5 hats.  
1 is purple and 4 are yellow.

$$\square + \square = \square$$



There are 5 gummy bears  
in a packet.

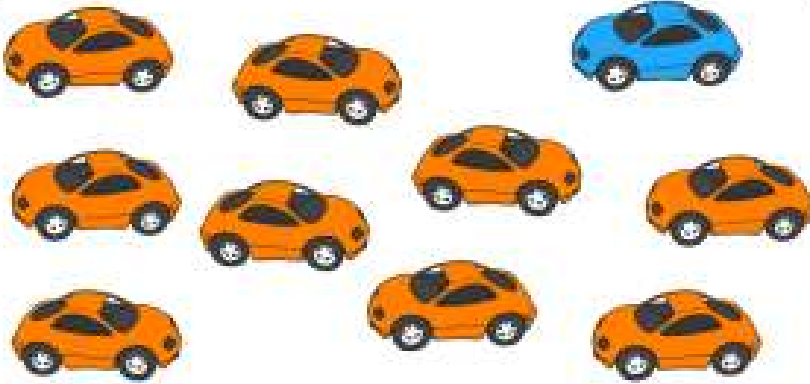
5 gummy bears are blue.  
0 gummy bears are green.




$$\square + \square = \square$$

## Number Bonds—Problem Solving


Now try with some number stories for bonds to 10:



I have 10 toy cars.  
1 is blue and 9 are orange.



I have 10 doughnuts.  
2 are plain but 8 are iced.



I have 10 roses.  
3 are white and 7 are red.