
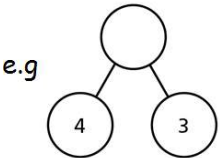
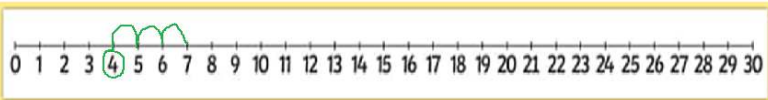

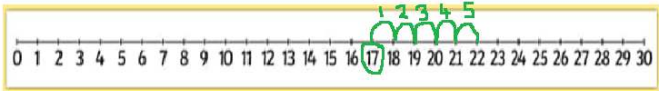



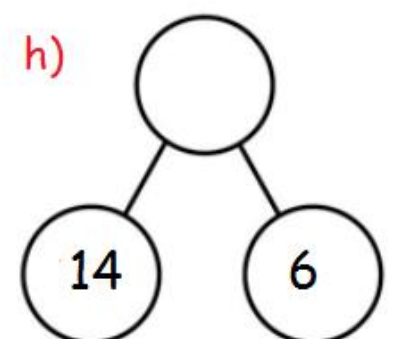
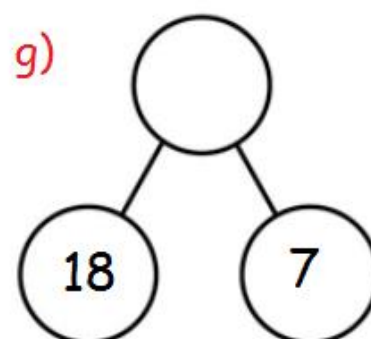
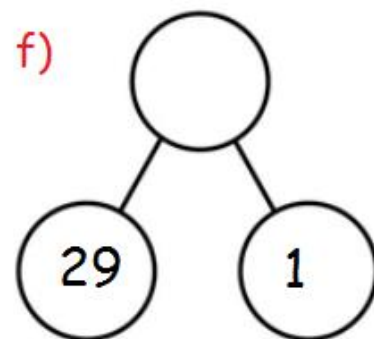
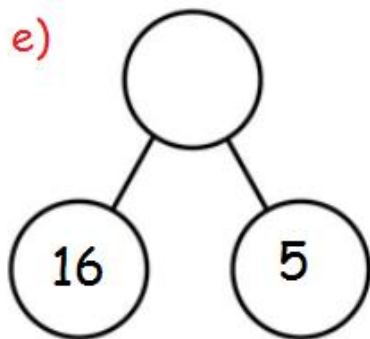
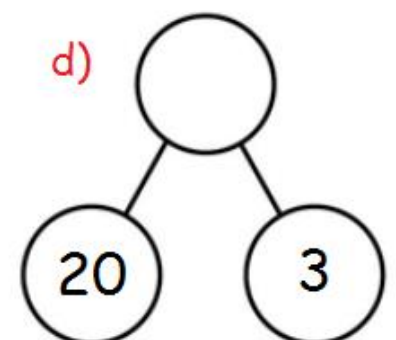
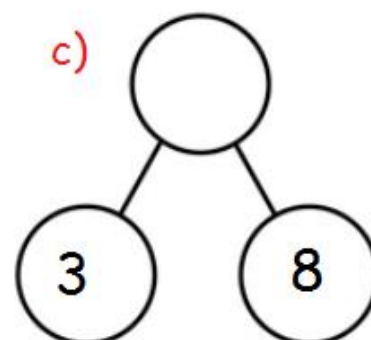
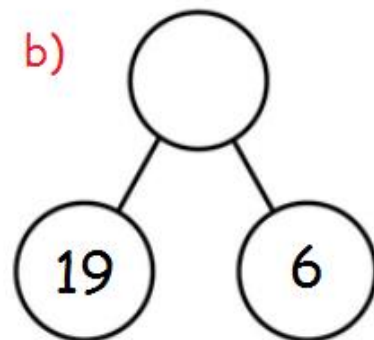
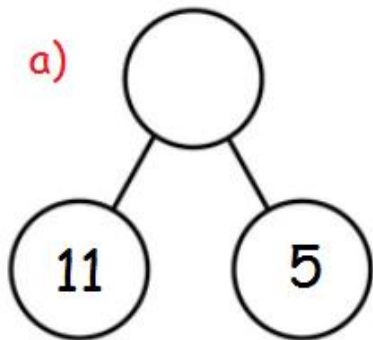
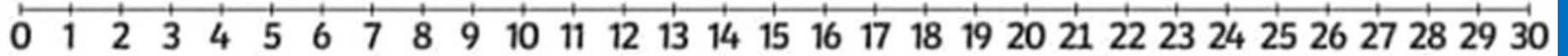


### Year One Maths Planning 25th January 2021

#### Weekly Focus: Addition to 30

	Activity
Monday	<p>This week we are going to be continuing thinking about <b>Addition</b>. Use a number line to help you find out the answers to the following questions:</p> <p>e.g <math>14 + 3 = 17</math></p>  <p><math>18 + 4 =</math>      <math>11 + 2 =</math>      <math>22 + 5 =</math>      <math>5 + 1 =</math>      <math>16 + 6 =</math>      <math>27 + 3 =</math>      <math>19 + 5 =</math></p> <p><b>Extra:</b> If you feel able you can do some extra additions up to 50.</p>
Tuesday	<p><b>Task 1:</b> Use a number line to help you add and complete the part – whole models on page 2 – draw and write them in your workbook.</p> <p>e.g</p>   <p>To find the answer to <math>4 + 3</math> start at 4 on the number line and jump 3. The answer is 7.</p> <p><b>Extra:</b> You can do some extra ones up to 50 if you like.</p>
Wednesday	<p>Watch <b>25.1.21 maths video</b> on your <b>Teams</b> account and join in with the following tasks.</p> <p><b>Task 1:</b> Can you find the number ... <b>Task 2:</b> Find the missing number part-whole model + bar model.</p>
Thursday	<p><b>Task 1:</b> Use a number line to help you add and complete the bar models on page 3 – draw and write them in your workbook.</p>   <p>To find the answer to <math>5 + 17</math> start with the largest number. So start on the number 17 and jump on 5 more. The answer is 22. Put the answer in the top part of the bar model.</p> <p><b>Extra:</b> You can do some extra ones to 50 if you like!</p>
Friday	<p><b>Task 1:</b> Play Robot Addition game- use the on screen number line to help you. <a href="https://www.topmarks.co.uk/addition/robot-addition">https://www.topmarks.co.uk/addition/robot-addition</a> Enjoy Year One!</p>  <div style="border: 1px solid black; padding: 10px; text-align: center;"> <p>Don't forget to log on to Numbots every day! Who can collect the most coins? Good luck everyone!</p> </div>

Tuesday: Addition:Part – Whole models Use the number line to help. (or make your own in your book)



Thursday: Addition: Bar Model Use the number line to help. (or make your own in your book)

