


Friday Maths

L.O: To make equal groups - grouping

- 1 Annie has 10 apples.



Annie has some plates.

She wants to put 2 apples on each plate.

Show how Annie groups the apples.

Complete the sentences.

There are apples.

There are apples on each plate.

There are plates.

- 2 Take 15 counters.



Put the counters into groups of 3

Complete the sentences.

There are 15 counters.

The counters are in groups of

There are groups.

3 Mo has 20 chairs.

a) Circle groups of 5 chairs.



b) How many groups did you circle?

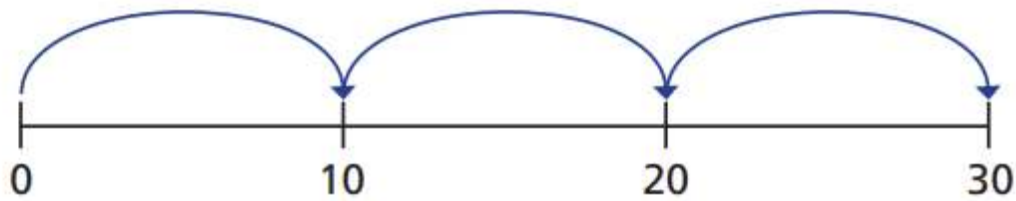
c) Complete the number sentence.

$$\square \div \square = \square$$

4 Complete the number sentences.

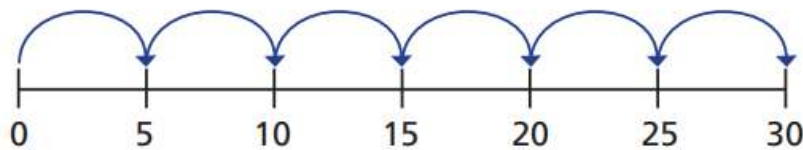
Use the number line to help you.

a) $30 \div 10 = \square$



30 is made of equal groups of

b) $30 \div 5 = \square$



30 is made of equal groups of

5 Eva is putting 24 pencils into pots.



She puts 2 pencils into each pot.

How many pots does Eva need?

6

With 40 counters
you can only make equal
groups of 4 and 10

Is Ron correct?

Use counters to show how you know.



Link to use online counters: [Counters
\(mathsbot.com\)](https://mathsbot.com)