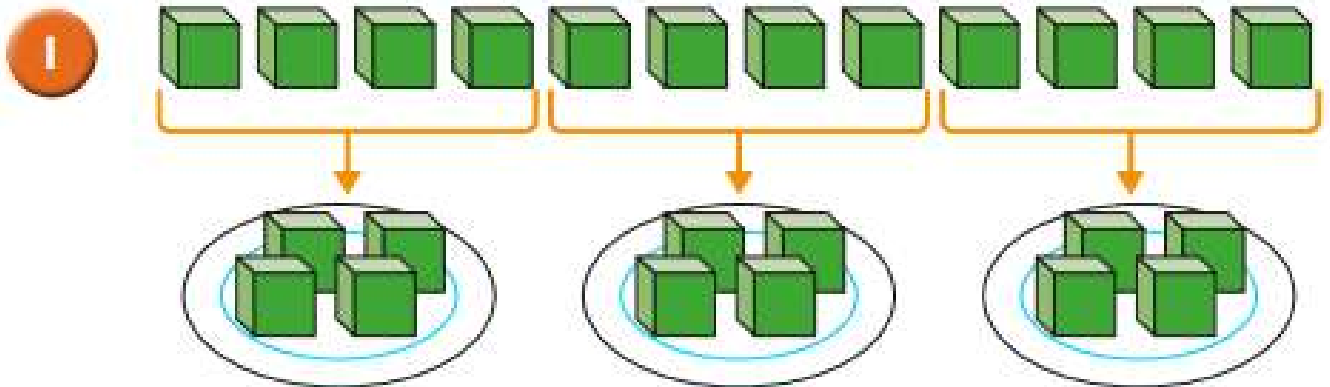


Friday Maths

L.O: To divide by 3.



Complete the sentences.

There are 12 cubes.

There are plates.

Each plate has cubes.

12 divided into equal groups is

2

Mo has 15 pencils.

He shares them equally into 3 pots.



How many pencils will there be in each pot?

You can use this box to show your working out.

3

Divide 18 counters into groups of 3 counters.

Draw a picture to show what this would look like.

Use this box to draw your answer.


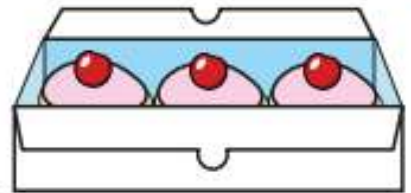
4

There are 27 cakes.

A box can hold 3 cakes.

How many boxes of 3 cakes can be filled?

Use the number line to help you.



5

Hair bands come in packs of 3.
If there are 21 bands altogether, how many packs are there?



You can use this box to show your working out.

6

Complete the division statements for each problem.

a) Esther has 21 balloons.

She puts them into 3 party bags.

How many balloons are in each party bag?

b) Nijah has 36 apples.

In each box there are 3 apples.

How many boxes are there?

c) 24 children stand in groups of 3

How many groups are there?