
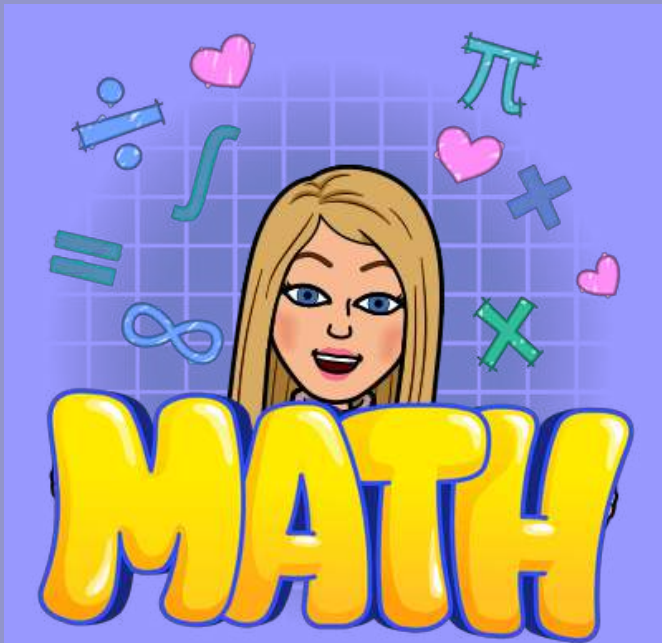


# Find the Numbers 1 Less Than and 1 More Than



# What Is 1 Less Than 1?

13

0

12


15

1

8

7

10



# What Is 1 More Than 1?

3

0

9


1

2

7

6

5



# What Is 1 Less Than 2?

9

0

2


8

5

7

1

3



# What Is 1 More Than 2?

9

0

4


11

5

8

1

3



# What Is 1 Less Than 3?

9

10

6


2

3

8

1

4



# What Is 1 More Than 3?

9

8

11


3

2

4

3

7



# What Is 1 Less Than 4?

6

9

3


11

5

10

1

2





# What Is 1 More Than 4?

3

9

7


4

11

5

3

2



# What Is 1 Less Than 5?

9

3

10


4

5

6

1

2



# What Is More 1 Than 5?

9

4

10


3

6

11

1

2



# What Is Less 1 Than 6?

7

4

5


3

9

2

1

6



# What Is More 1 Than 6?

2

3

5


6

5

10

1

7



# What Is 1 Less Than 7?

2

6

5


8

4

8

1

7



# What Is 1 More Than 7?

2

9

7


3

8

4

1

6



# What Is 1 Less Than 8?

9

11

7


10

8

4

6

5





# What Is 1 More Than 8?

11

6

4


5

8

10

9

7



# What Is 1 Less Than 9?

6

2

10


8

4

11

7

5



# What Is 1 More Than 9?

8

4

6


7

5

10

2

9





Task:

Pick a number between 1 and 10.

Give this number to Mummy Bear.

Can you give Daddy Bear the number that is one more?

Can you give Baby Bear the number that is one less?

For an extra challenge – try using numbers 1 to 20.