

Draw the spots on the butterfly and complete the sentence below each one.



Double 3 is ____




Double 8 is ____




Double 6 is ____




Double 10 is ____




Double 7 is ____



Double 9 is ____



Double 5 is ____



Double 4 is ____

Double 11 is ____

Double 12 is ____