



Counting in Tens in the Pet Shop




There are 10 fish
in each fish tank.


1) How many fish does the pet shop have altogether?



2) They sell 3 tanks of fish. How many now?



3) They sell 2 more tanks of fish. How many now?



Extra:

4) How many fish are there in 3 fish tanks?

5) How many fish are there in 9 fish tanks?

6) How many fish tanks are needed for 60 fish?