



Number Bonds to 10—Tens Frames


Count the different coloured counters to help you work out the number bonds to 10.




$$\boxed{5} + \boxed{} = \boxed{10}$$



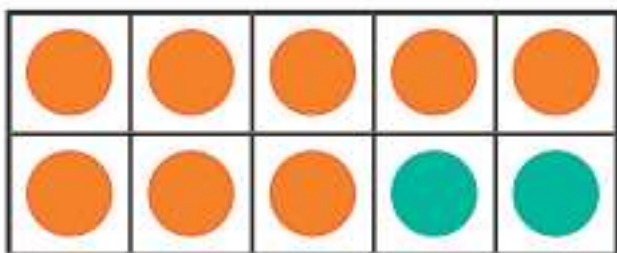
$$\boxed{1} + \boxed{} = \boxed{10}$$




$$\boxed{3} + \boxed{} = \boxed{}$$



$$\boxed{} + \boxed{} = \boxed{10}$$



$$\boxed{} + \boxed{2} = \boxed{}$$



$$\boxed{} + \boxed{} = \boxed{10}$$