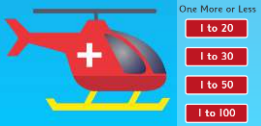






Year One Maths Planning 18th May 2020

Weekly Focus: One more, One less

	Activity																				
Monday	<p>Look at the number line. What number is one more than 6? How did you know that? Can you explain how you knew to your family? Ask your family to ask you some more one more questions? <i>e.g What is one more than 18? What is one more than 11? etc</i></p> <table border="1" style="margin-left: auto; margin-right: auto;"> <tr> <td>1</td><td>2</td><td>3</td><td>4</td><td>5</td><td>6</td><td>7</td><td>8</td><td>9</td><td>10</td> </tr> <tr> <td>11</td><td>12</td><td>13</td><td>14</td><td>15</td><td>16</td><td>17</td><td>18</td><td>19</td><td>20</td> </tr> </table> <p>Look again at the number line. What number is one less than 8? How did you know that? Can you explain how you knew to your family? Ask your family to ask you some more less more questions? <i>e.g What is one less than 16? What is one more than 10? etc</i></p> <div style="display: flex; align-items: flex-start;">  <div> <p>Task: Play this fun one more than/one less than helicopter game. https://www.topmarks.co.uk/learning-to-count/chopper-squad</p> <p>Start with 1-20, then see if you can try the higher numbers –Can you go up to 100? Good luck Year One!</p> </div> </div>	1	2	3	4	5	6	7	8	9	10	11	12	13	14	15	16	17	18	19	20
1	2	3	4	5	6	7	8	9	10												
11	12	13	14	15	16	17	18	19	20												
Tuesday	<p>Write down the numbers 0-50. (If you want you could go up to 100!)</p> <p>Task: Play a game with your family. Ask each other 10 questions : <i>What is 1 more than ... or What is one less than...</i> Who will be the winner?</p>																				
Wednesday	<p>Have a go at the dinosaur track problem solving activity underneath (on page 2)—use your knowledge of 1 more and less to find the missing numbers? https://www.twinkl.co.uk/resource/year-1-diving-into-mastery-one-more-one-less-activity-cards-t-n-2546811</p>																				
Thursday	<p>In the Vegetable Shop – (underneath on page 3) Can you work out who bought which vegetable - use your knowledge of 1 more and less to find out? https://www.twinkl.co.uk/resource/year-1-diving-into-mastery-count-one-more-activity-cards-t-n-7545</p>																				
Friday	<div style="display: flex; align-items: flex-start;">  <div> <p>Recap learning from the week. How many Challenge Card Questions can you answer? https://www.twinkl.co.uk/resource/t-n-2545570-y1-one-more-and-one-less-maths-mastery-challenge-cards</p> </div> </div> <div style="text-align: right; margin-top: 20px;">  </div>																				

One More, One Less



The dinosaurs have walked all over the hundred square.



What are the missing numbers?



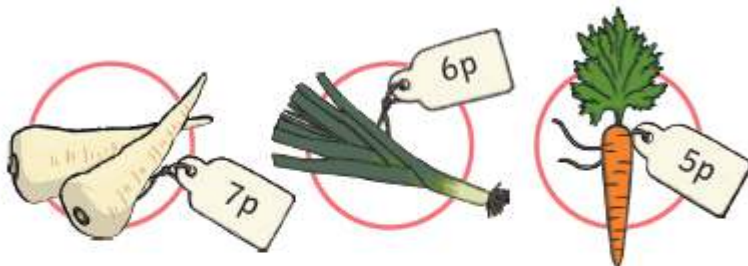
	2	3	4	5	6	7	8	9	10
11	12	13		15	16	17	18	19	20
21		23	24	25	26	27	28	29	30
31	32	33		35	36	37	38	39	40
41	42	43	44	45		47	48	49	50
51	52	53		55	56	57	58	59	60
61	62	63	64	65	66		68	69	70
71	72	73	74		76	77	78	79	80
81	82	83	84	85	86	87		89	90
91	92	93	94	95	96	97	98	99	

Count One More



Counting One More

What did each child buy in the vegetable shop?



Ben says,

I spent 5p.



Nina says,

I spent the most.



Fran says,

I spent 1p more than Ben.



You buy an onion. Choose a price between 1p and 10p. Can you give some clues so your friend can guess the price?